

CANDIDATE  
NAME

--

CENTRE  
NUMBER

--	--	--	--	--

CANDIDATE  
NUMBER

--	--	--	--



**BIOLOGY**

**5090/21**

Paper 2 Theory

**October/November 2015**

**1 hour 45 minutes**

Candidates answer on the Question Paper.

No Additional Materials are required.

**READ THESE INSTRUCTIONS FIRST**

Write your Centre number, candidate number and name on all the work you hand in.

Write in dark blue or black pen.

You may use an HB pencil for any diagrams or graphs.

Do not use staples, paper clips, glue or correction fluid.

**DO NOT WRITE IN ANY BARCODES.**

**Section A**

Answer **all** questions in this section.

Write your answers in the spaces provided on the Question Paper.

**Section B**

Answer **both** questions in this section.

Write your answers in the spaces provided on the Question Paper.

**Section C**

Answer **either** question 8 **or** question 9.

Write your answers in the spaces provided on the Question Paper.

You are advised to spend no longer than one hour on Section A.

Electronic calculators may be used.

You may lose marks if you do not show your working or if you do not use appropriate units.

At the end of the examination, fasten all your work securely together.

The number of marks is given in brackets [ ] at the end of each question or part question.

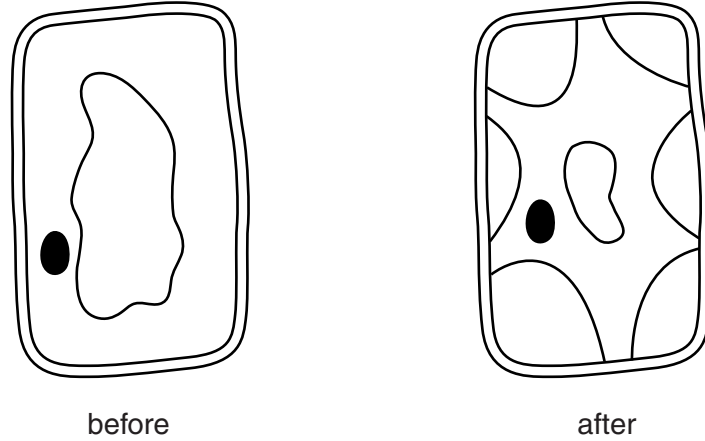
This document consists of **16** printed pages.

**Section A**

Answer **all** questions in this section.

Write your answers in the spaces provided.

- 1 Fig. 1.1 shows a plant cell before and after being placed in a concentrated salt solution.



**Fig. 1.1**

- (a) With reference to **named** parts of the cell, describe changes in the appearance of the cell after being placed in the concentrated salt solution.

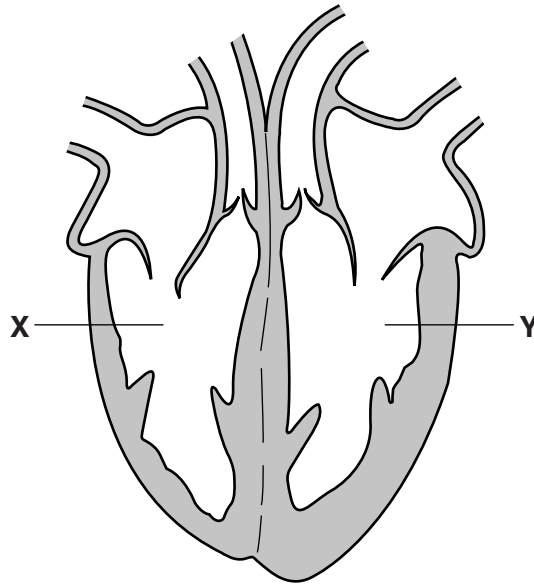
.....  
.....  
.....  
.....  
.....  
..... [3]

- (b) Explain how the changes you have described in (a) have occurred.

.....  
.....  
.....  
.....  
..... [3]

[Total: 6]

- 2 Fig. 2.1 shows a vertical section through a human heart viewed from the front. Two chambers, X and Y, are labelled.



**Fig. 2.1**

- (a) Use Fig. 2.1, and your knowledge of the circulatory system, to complete Table 2.1.

**Table 2.1**

chamber	name of chamber	name of blood vessel carrying blood from chamber
X		
Y		

[4]



(c) Fig. 2.3 shows blood returning to the heart at low pressure through a vein in a leg.

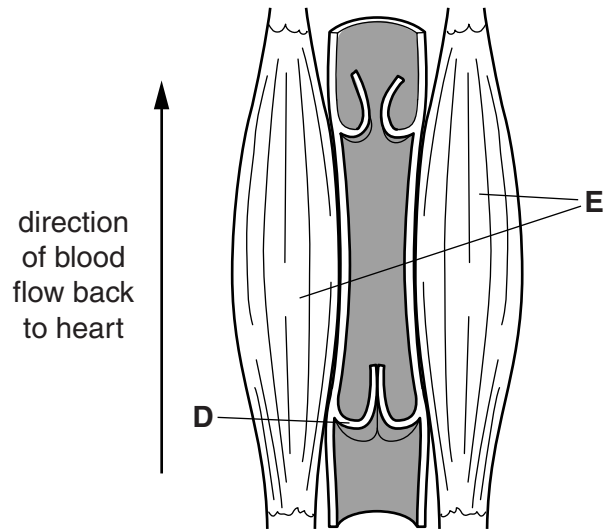


Fig. 2.3

Name part **D** in Fig. 2.3.

Explain how this part enables blood to return to the heart.

(i) name of part **D** .....

function .....

.....

..... [2]

(ii) Suggest how the parts labelled **E** in Fig. 2.3 help blood to return to the heart.

.....

.....

.....

.....

..... [2]

[Total: 14]

3 (a) Fig. 3.1 shows the distribution of blood groups in the population of a country.

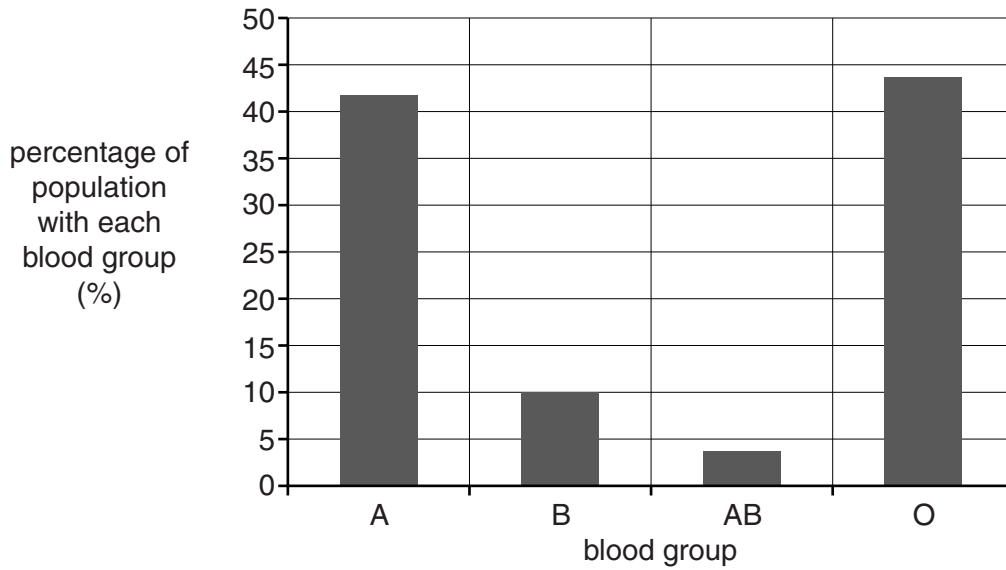


Fig. 3.1

(i) State the type of variation shown in Fig. 3.1.

..... [1]

(ii) Give a reason for your answer to part (a)(i).

.....  
 ..... [1]

(iii) The population of this country is approximately 63 million people. Use the information in Fig. 3.1 to calculate the approximate number of people in the country that have **blood group B**.

Show your working in the space below.

..... [2]

(b) Table 3.1 shows the distribution of blood groups in the populations of four countries.

**Table 3.1**

country	percentage of population with each blood group (%)			
	A	B	AB	O
<b>S</b>	23	38	10	29
<b>T</b>	42	10	4	44
<b>U</b>	26	18	.....	52
<b>V</b>	36	14	4	46

(i) Calculate the percentage of the population of country **U** that has blood group AB.

Write your answer in the space provided in Table 3.1. [1]

(ii) Suggest why the percentage of the population with each blood group varies between the countries listed.

.....

.....

.....

.....

..... [2]

(c) Suggest why it might be necessary to know a person's blood group.

.....

.....

.....

.....

..... [2]

(d) A child's mother has blood group AB and the child's father has blood group O.

Draw a **ring** around each possible genotype and blood group of the child.

genotypes	$I^A I^A$	$I^A i^o$	$I^B I^B$	$I^B i^o$	$I^A I^B$	$i^o i^o$
blood groups	<b>A</b>	<b>B</b>	<b>AB</b>	<b>O</b>		

You may use the space below to work out your answer.

[2]

[Total: 11]



- 4 (a) Fig. 4.1 shows changes in the thickness of the uterus lining and in the concentration of progesterone in the blood during the menstrual cycle.

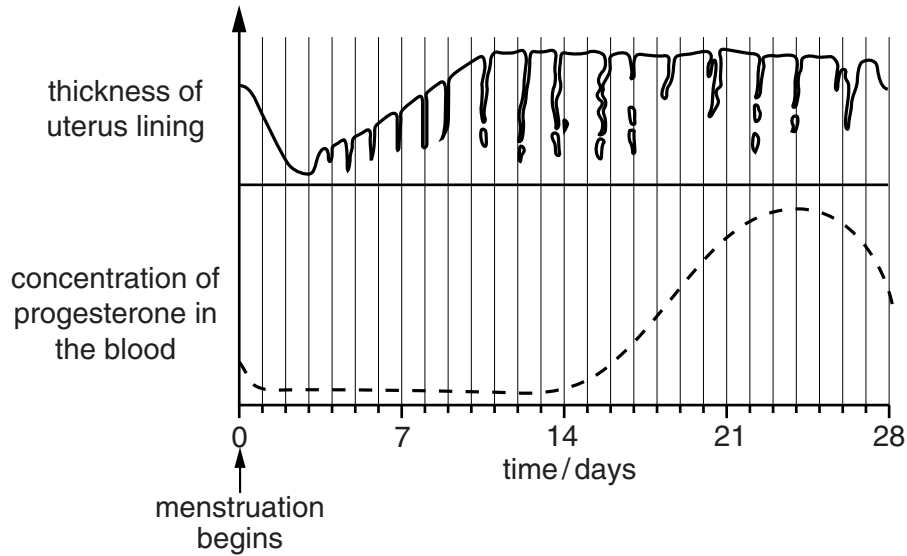


Fig. 4.1

- (i) Use Fig. 4.1 to state the time at which each of the following occurs:

the uterus lining reaches maximum thickness

.....

the concentration of progesterone begins to increase.

.....

[2]

- (ii) Draw a ring around the day from Fig. 4.1 on which ovulation is most likely to occur.

day 0

day 7

day 14

day 21

day 28

[1]

- (iii) Explain how it can be concluded from Fig. 4.1 that the person did **not** become pregnant during the 28 days shown, even though ovulation occurred.

.....  
 .....  
 .....  
 .....

[2]

(b) The menstrual cycle is controlled by hormones. Name **two** hormones, **other than progesterone**, that control the menstrual cycle. State **one** role of each hormone.

name of hormone

.....

role in the menstrual cycle

.....

.....

name of hormone

.....

role in the menstrual cycle

.....

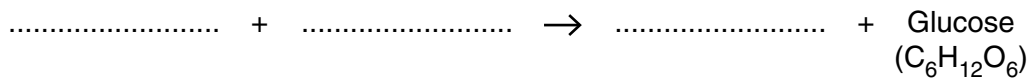
..... [4]

[Total: 9]



(b) Photosynthesis takes place in the leaves of the plant.

Complete the equation below for photosynthesis using either words or symbols.



[1]

(c) Fig. 5.2 shows one leaf taken from the plant and the appearance of part of the lower side of the leaf when viewed using a microscope.

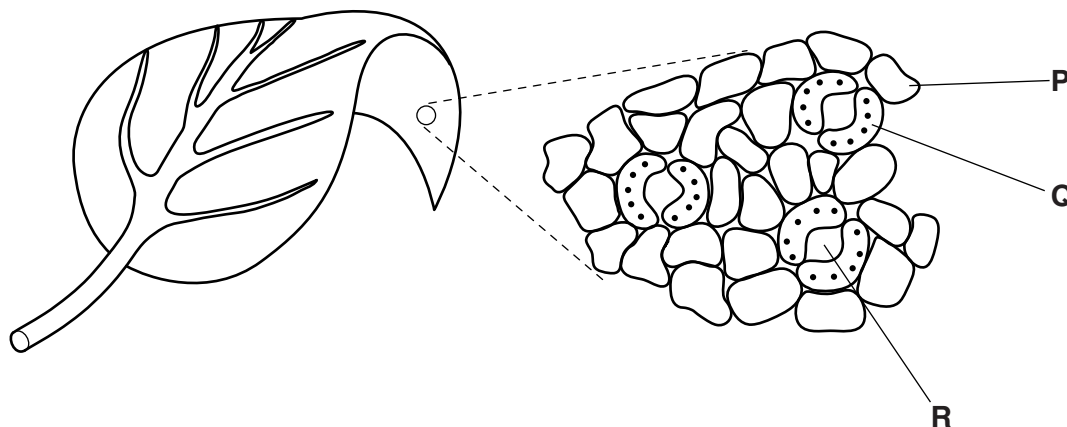


Fig. 5.2

(i) Name the parts labelled P, Q and R in Fig. 5.2.

P .....

Q .....

R .....

[3]

(ii) Suggest how the upper surface of the same leaf would appear different from the lower surface shown in Fig. 5.2 when viewed using a microscope. Explain the reason for this difference.

.....

.....

.....

..... [2]

[Total: 10]

**Section B**

Answer **both** questions in this section.

Write your answers in the spaces provided.

6 (a) Explain why most foods must be digested.

.....  
.....  
.....  
.....  
.....  
..... [3]

(b) Describe the digestion of fats.

You should include reference to the following in your answer:

- named regions of the alimentary canal and associated organs
- named chemicals, including the end products of fat digestion.

.....  
.....  
.....  
.....  
.....  
.....  
.....  
.....  
.....  
.....  
.....  
.....  
.....  
.....  
.....  
.....  
.....  
.....  
.....  
..... [7]

[Total: 10]  
**[Turn over**





9 (a) Define the term *excretion*.

.....  
.....  
.....  
.....  
.....  
..... [3]

(b) Explain how a kidney machine carries out the functions of a kidney for a person with kidney disease.

.....  
.....  
.....  
.....  
.....  
.....  
.....  
.....  
.....  
.....  
.....  
.....  
.....  
.....  
.....  
.....  
.....  
.....  
..... [7]

[Total: 10]

---

Permission to reproduce items where third-party owned material protected by copyright is included has been sought and cleared where possible. Every reasonable effort has been made by the publisher (UCLES) to trace copyright holders, but if any items requiring clearance have unwittingly been included, the publisher will be pleased to make amends at the earliest possible opportunity.

To avoid the issue of disclosure of answer-related information to candidates, all copyright acknowledgements are reproduced online in the Cambridge International Examinations Copyright Acknowledgements Booklet. This is produced for each series of examinations and is freely available to download at [www.cie.org.uk](http://www.cie.org.uk) after the live examination series.

Cambridge International Examinations is part of the Cambridge Assessment Group. Cambridge Assessment is the brand name of University of Cambridge Local Examinations Syndicate (UCLES), which is itself a department of the University of Cambridge.